

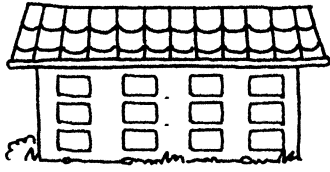





Aufgaben und Tauschaufgaben

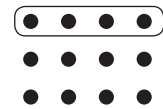



1 Schreibe zu jedem Bild zwei Mal-Aufgaben, dann rechne aus.



2 Schreibe zum jedem Bild zwei Mal-Aufgaben, dann rechne aus.



3


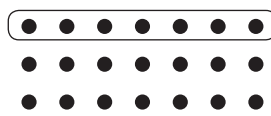



$5 \cdot 6 =$

$\cdot 5 =$

$\cdot =$

$\cdot =$







$\cdot =$

$\cdot =$

$\cdot =$

$\cdot =$

4



$\cdot =$

$\cdot =$

$\cdot =$

$\cdot =$

$\cdot =$

$\cdot =$

$\cdot =$

$\cdot =$
