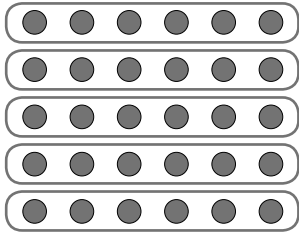


## Aufgabe und Tauschaufgabe

**1** Umkreise. Schreibe Aufgabe und Tauschaufgabe.




a)



$$5 \cdot 6 =$$

5 Sechser

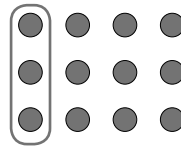
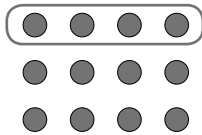


$$\cdot 5 =$$

Fünfer



b)




---



---

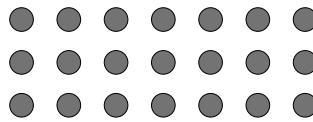



---



---

**2** a)




---



---

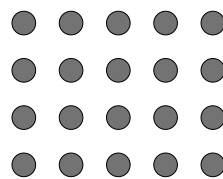
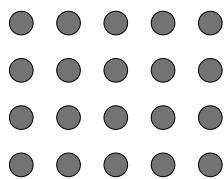


---



---

b)




---



---



---



---

